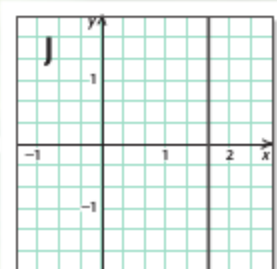
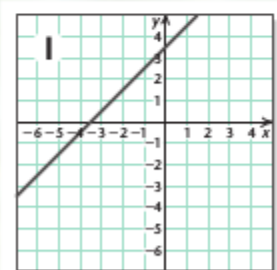
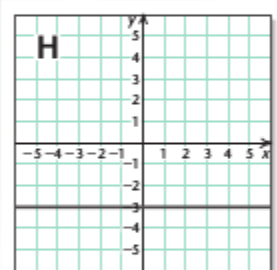
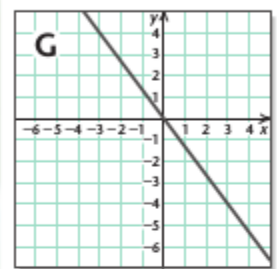
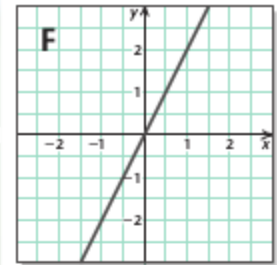
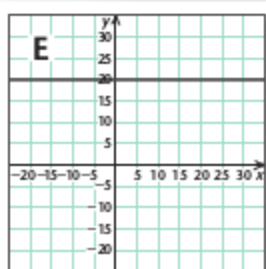
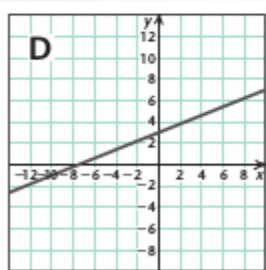
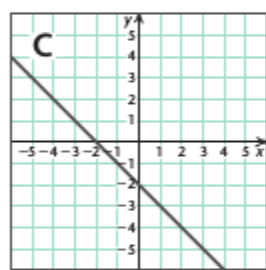
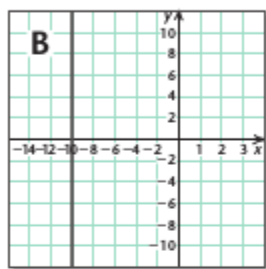
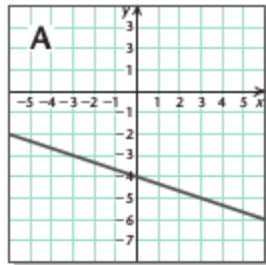


Name: _____

Date: _____

Algebra & Trigonometry Quiz, Chapter 1.4



Visualizing the Graph

Match the equation with its graph.

1. $y = 20$
2. $5y = 2x + 15$
3. $y = -\frac{1}{3}x - 4$
4. $x = \frac{5}{3}$
5. $y = -x - 2$
6. $y = 2x$
7. $y = -3$
8. $3y = -4x$
9. $x = -10$
10. $y = x + \frac{7}{2}$